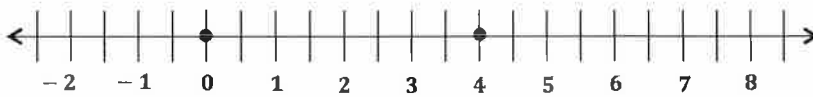



**Problem Set**

Write a story related to the points shown in each graph. Be sure to include a statement relating the numbers graphed on the number line to their order.

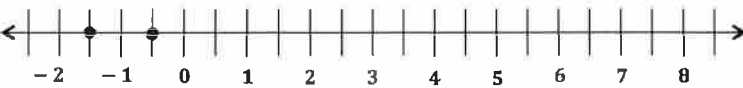
1.



2.



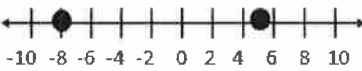
3.



4.



5.



6.



7.

